

# CLASS 9 SUMMER VACATION HOLIDAY HOMEWORK

## Sub:- ENGLISH

### Q 1. Questionnaire. Making

How to do: prepare fifteen multiple choice questions from the given syllabus of the book (Beehive), and from the (Moment) .

### Q 2. Writing Work–

(A) write two articles on the current social issues.

(B) maintain a personal dictionary and add one word daily for your vocabulary.

(C). Read English newspaper daily and maintain a file of daily news headlines.

### Q3. Creation with proverb --

How to do: describe any one of the following proverbs in your own words.

You should also add pictures to make it creative.

\*\* 'The pen is mightier than the sword'.

\*\* 'No pain no gain '

\*\* 'All is well that ends well '

Note: plant more and more  to make the environment healthy.

## Sub:- HINDI

1. 'दो बैलों की कथा' अपने शब्दों में लिखिए।
2. 'ल्हासा की ओर' एक यात्रा वृत्तांत है, पाठ के आधार पर सिद्ध कीजिए।
3. दो-दो औपचारिक और अनौपचारिक पत्र लिखिए।
4. समास के सभी भेदों की परिभाषा लिखिए। दस-दस उदाहरण लिखिए।

5. अर्थ के आधार पर वाक्य के सभी भेदों की परिभाषा लिखिए और पाँच-पाँच उदाहरण दीजिए।
6. इंटरनेट के 'लाभ-हानि' पर 150-200 शब्दों में अनुच्छेद लिखिए।
7. प्रतिदिन समाचार सुनिए और दो-दो मुख्य समाचार कापी में लिखिए।
8. स्वरचित कविता बनाकर चार्ट तैयार कीजिए।

## Sub:- MATHS

1. The LCM of two numbers is 280 and their ratio is 7 : 8 . The numbers  
(a) 70, 80 (b) 54, 68 (c) 35, 40 (d) 28, 36 (e) None of these
2. Three persons start walking together and their steps measure 40 cm, 42 cm and 45 cm respectively. What is the minimum distance each should walk so that each can cover the same distance in complete steps?  
(a) 25 m 20 cm (b) 50 m 40 cm (c) 75 m 60 cm (d) 100 m 80 cm (e) None of these
3. A man plants 15376 apple trees in his garden and arranges them so that there are as many rows as there are apples trees in each row. The number of rows is:  
(a) 124 (b) 126 (c) 134 (d) 144 (e) None of these
4. In a cricket match, the number of runs scored by any team is equal to power of the number of batsmen playing in the team. Six batsmen played in team A and eleven batsmen played in team B. If team A won by 95 runs, then find the runs scored by team A.  
(a) 216 (b) 220 (c) 210 (d) 230 (e) None of these
5. If the sum of a number and its square is 182, then what is the number?  
(a) 15 (b) 26 (c) 28 (d) 13 (e) None of these
6. A boy has enough money to buy 20 exercise books. If each book cost 25 paise less, he could buy two more books and still have 70 paise left. How much money had he originally?

- (a) 45 (b) 48 (c) 50 (d) 52 (e) None of these

## Sub:- SCIENCE


1. Prepare a model to compare plant cell and Animal cell Using Common household items like grains and pulses etc.
2. Do NCERT questions of chapter cell the fundamental unit Of life.
3. Grow the roots of onion bulb and make an observation table.

## Sub:- SOCIAL SCIENCE

Make a project on Indian Constitution.

Write and Explain on A4 about the process of election of president in India.

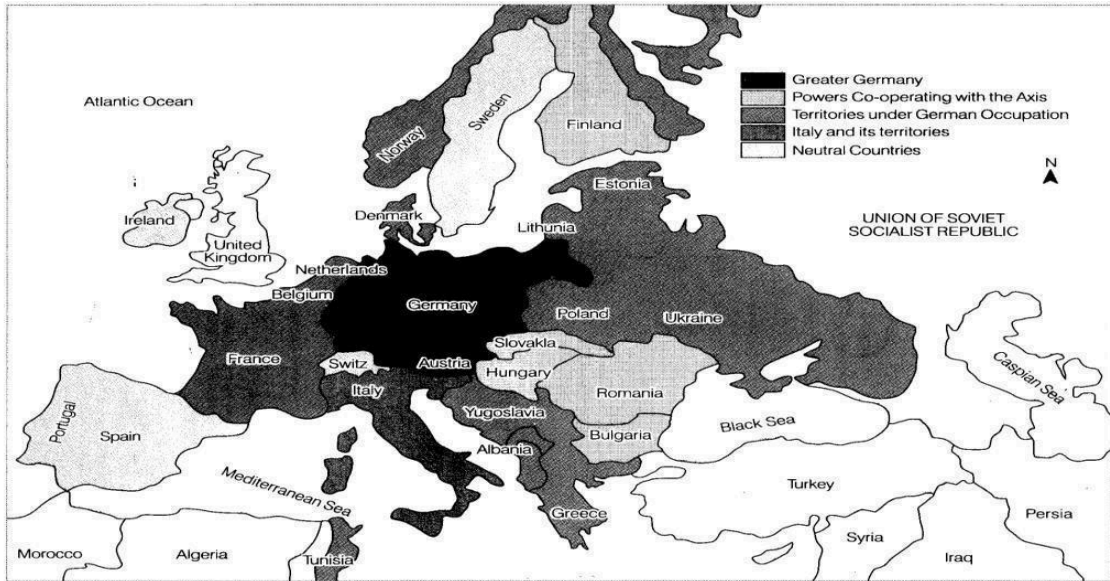
- Mention the article in which explain about the election of president · Value of vote
- Preference Voting
- How to find result



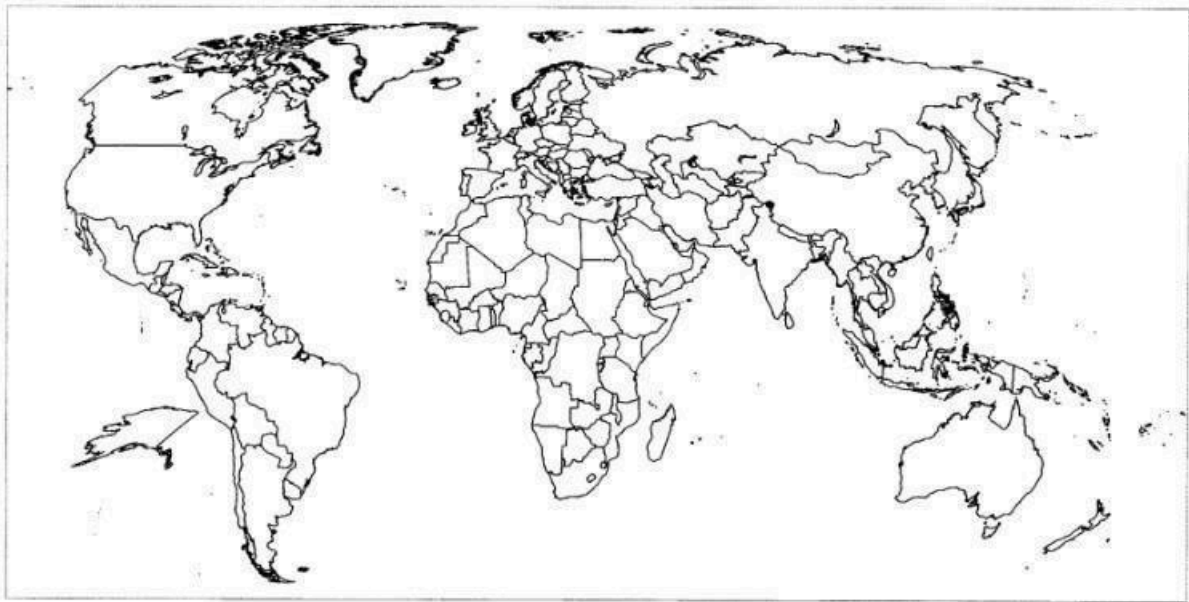
1. Explain the role of thinkers and philosophers in the French Revolution.
2. Evaluate the importance of the following years in concern with French Revolution, 1774, 1789, 1791, 1804 and 1815.
3. What were the main causes of the French Revolution of 1789?

4. Write A note on the Bloody Sunday incident.
  5. Explain any three major effects of the Russian Revolution of October 1917 on Russian economy.
  6. Explain any four reasons why Russian people wanted the Tsar to withdraw from the First World War.
  7. The Treaty of Versailles was harsh and humiliating'. Justify by giving four terms of the treaty.
  8. What steps were taken by Hitler to reconstruct Germany?
  9. Explain the following terms :
    - (i) Holo-caust,
    - (ii) Concentration Camp,
    - (iii)Wall Street Exchange.
  10. What does direct democracy imply? Why can it not be practised in the present day world?
  11. Democracy is all about political competition and powerplay. There is no scope for morality'. Justify the statement by giving arguments against democracy.
  12. Democracy is better than other forms of government because it allows us to correct its own mistakes."
13. Describe the main features of Preamble of the Indian Constitution.
14. What makes elections in India democratic? Explain
  15. Explain the role of the Election Commission in free and fair elections
- Solve spark test in holiday home  
work note book.

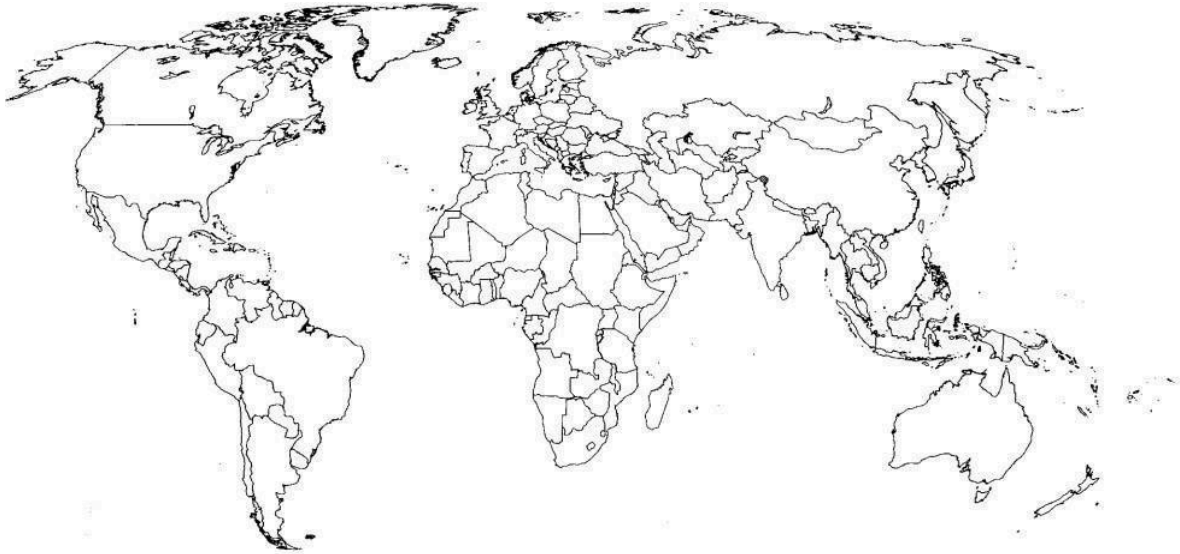
**MAP WORK- MAJOR COUNTRIES IN 2<sup>ND</sup> WORLD WAR**



**On the outline map of world, locate and label the countries that were Axis Powers in Second World War.**



**On the given outline map of world locate, the countries that were central powers in the First World War.**



**Read Biography-( Any One)**

1. **Adolf Hitler**
2. **Lenin**
3. **Stalin**
4. **Napoleon Bonaparte**



**Edufever**